

MECHANICAL ENGINEERING

Fluid Mechanics and Hydraulic Machines



Comprehensive Theory
with Solved Examples and Practice Questions





MADE EASY Publications Pvt. Ltd.

Corporate Office: 44-A/4, Kalu Sarai (Near Hauz Khas Metro Station), New Delhi-110016 | **Ph. :** 9021300500

Email : infomep@madeeasy.in | **Web :** www.madeeasypublications.org

Fluid Mechanics and Hydraulic Machines

Copyright © by MADE EASY Publications Pvt. Ltd.

All rights are reserved. No part of this publication may be reproduced, stored in or introduced into a retrieval system, or transmitted in any form or by any means (electronic, mechanical, photo-copying, recording or otherwise), without the prior written permission of the above mentioned publisher of this book.



MADE EASY Publications Pvt. Ltd. has taken due care in collecting the data and providing the solutions, before publishing this book. In spite of this, if any inaccuracy or printing error occurs then **MADE EASY Publications Pvt. Ltd.** owes no responsibility. We will be grateful if you could point out any such error. Your suggestions will be appreciated.

EDITIONS

First Edition : 2015
Second Edition : 2016
Third Edition : 2017
Fourth Edition : 2018
Fifth Edition : 2019
Sixth Edition : 2020
Seventh Edition : 2021
Eighth Edition : 2022
Ninth Edition : 2023
Tenth Edition : 2024

Eleventh Edition : 2025

CONTENTS

Fluid Mechanics and Hydraulic Machines

CHAPTER 1

Fluid Properties..... 01-27

1.1	Introduction	1
1.2	Fluid Mechanics	1
1.3	Fluid as a Continuum	2
1.4	Fluid Properties	2
1.5	Viscosity	4
1.6	Surface Tension	10
1.7	Applications of Surface Tension	12
1.8	Vapour Pressure	17
1.9	Cavitation	17
1.10	Compressibility and Elasticity	18
	<i>Objective Brain Teasers</i>	23
	<i>Conventional Brain Teasers</i>	26

CHAPTER 2

Fluid Pressure & its Measurement..... 28-47

2.1	Introduction	28
2.2	Pressure at a Point in a Fluid.....	28
2.3	Different Types of Pressure.....	30
2.4	Variation of Pressure in Vertical Direction (For fluid at Rest)	30
2.5	Pressure Head	32
2.6	Pressure Measurement Devices	33
2.7	Simple Manometers	34
2.8	Differential Manometers.....	38
2.9	Mechanical Gauge	41
	<i>Objective Brain Teasers</i>	42
	<i>Conventional Brain Teasers</i>	45

CHAPTER 3

Hydrostatic Forces on Surfaces..... 48-70

3.1	Introduction	48
3.2	Total Hydrostatic Force on a Plane Surface	48
3.3	Pressure Diagram or Prism	56
3.4	Total Hydrostatic Force on Curved Surface	57
	<i>Objective Brain Teasers</i>	60
	<i>Conventional Brain Teasers</i>	65

CHAPTER 4

Buoyancy and Floatation..... 71-92

4.1	Introduction	71
4.2	Buoyant Force	71
4.3	Metacentre and Metacentric Height	74
4.4	Determination of Metacentric Height.....	74
4.5	Stability of Submerged and Floating Bodies.....	76
4.6	Metacentric Height for Floating Bodies Containing Liquid.....	81
4.7	Time Period of Transverse Oscillation of a Floating Body	82
4.8	Rolling and Pitching	83
	<i>Objective Brain Teasers</i>	85
	<i>Conventional Brain Teasers</i>	89

CHAPTER 5

Liquids in Rigid Body Motion93-113

5.1	Introduction	93
5.2	Rigid Translation Motion.....	93
5.3	Rigid Rotational Motion	102
	<i>Objective Brain Teasers</i>	108
	<i>Conventional Brain Teasers</i>	112

CHAPTER 6**Fluid Kinematics..... 114-152**

6.1	Introduction	114
6.2	Types of Fluid Flow.....	115
6.3	Description of Flow Pattern	120
6.4	Continuity Equation	123
6.5	Acceleration of a Fluid Particle	127
6.6	Types of motion or Deformation of fluid elements	132
6.7	Circulation and Vorticity.....	135
6.8	Velocity Potential.....	137
6.9	Stream Function.....	139
6.10	Streamlines, Equipotential Lines and Flow Net	141
	<i>Objective Brain Teasers</i>	144
	<i>Conventional Brain Teasers</i>	150

CHAPTER 7**Fluid Dynamics 153-198**

7.1	Introduction	153
7.2	Forces Acting on Fluid in Motion.....	153
7.3	Euler's Equation of Motion along the Streamline	154
7.4	Bernoulli's Equation of Motion along the Streamline... ..	154
7.5	Analysis of Bernoulli's Equation.....	155
7.6	Bernoulli's Equation as Energy Equation.....	156
7.7	Applications of Bernoulli's Equation.....	159
7.8	Free Liquid Jet.....	169
7.9	Vortex Motion	171
7.10	Impulse Momentum Equation	177
7.11	Angular Momentum Principle	185
	<i>Objective Brain Teasers</i>	188
	<i>Conventional Brain Teasers</i>	196

CHAPTER 8**Laminar Flow 199-219**

8.1	Introduction	199
8.2	Laminar Flow Through Circular Pipe (Hagen-Poiseuille law)	199
8.3	Laminar Flow between Two Parallel Plates	206
	<i>Objective Brain Teasers</i>	213
	<i>Conventional Brain Teasers</i>	217

CHAPTER 9**Turbulent Flow in Pipes..... 220-240**

9.1	Introduction	220
9.2	Shear Stress in Turbulent Flow.....	221
9.3	Various Regions in Turbulent Flow	224
9.4	Hydrodynamically Smooth and Rough Boundaries....	225
9.5	Velocity Distribution for Turbulent Flow in Pipes	226
9.6	Karman Prandtl Velocity Distribution Equation for Hydrodynamically Smooth and Rough Pipes	227
9.7	Velocity Distribution in Terms of Average Velocity...	231
9.8	Friction Factor in Turbulent Flow Through Pipes	234
	<i>Objective Brain Teasers</i>	238

CHAPTER 10**Flow Through Pipes..... 241-295**

10.1	Introduction	241
10.2	Reynolds' Experiment.....	241
10.3	Laws of Fluid Friction	243
10.4	Velocity Profile in Pipe Flow.....	244
10.5	Loss of Energy in pipes	245
10.6	Head Loss Due to Friction in Pipe	246
10.7	Minor Losses.....	250
10.8	Total Energy line and Hydraulic Gradient Line	258
10.9	Various Connections in Pipelines.....	261
10.10	Flow Through a By-pass	265
10.11	Siphon	266
10.12	Flow between reservoirs at different level	270
10.13	Time of emptying a reservoir through a pipe discharged in open air	270
10.14	Time required to reduced the level difference between two reservoirs from H_1 to H_2	271
10.15	Loss of Head due to Friction in a Pipe with Side Tappings.....	272
10.16	Transmission of Power.....	273
10.17	Water Hammer in pipes.....	275
10.18	Pipe Network.....	281
	<i>Objective Brain Teasers</i>	285
	<i>Conventional Brain Teasers</i>	293

CHAPTER 11**Boundary Layer Theory 296-319**

11.1	Introduction	296
11.2	Various Types of Thicknesses of Boundary Layer	297
11.3	Boundary Layer along a Long Thin Flat Plate	301
11.4	Boundary Layer Equations (for 2-D steady, laminar flow of incompressible fluids)	304
11.5	Local and Average Drag Coefficient	304
11.6	Blasius Results	306
11.7	Von-Karman Integral Momentum Equation	309
11.8	Boundary Layer Separation	311
	<i>Objective Brain Teasers</i>	316
	<i>Conventional Brain Teasers</i>	319

CHAPTER 12**Dimensional Analysis.....320-347**

12.1	Introduction	320
12.2	Dimensions	320
12.3	Dimensional Homogeneity	322
12.4	Non-Dimensionalisation of Equations	324
12.5	Methods of Dimensional analysis	325
12.6	Model Analysis	329
12.7	Similitude (Types of Similarities)	330
12.8	Force Ratios-Dimensionless Numbers	331
12.9	Model Laws (similarity laws)	333
	<i>Objective Brain Teasers</i>	341
	<i>Conventional Brain Teasers</i>	345

CHAPTER 13**External Flow-Drag and Lift348-370**

13.1	Introduction	348
13.2	Drag and Lift	348
13.3	Types of Drag	350

13.4	Drag on various shapes	352
13.5	Lift on various shapes	360
	<i>Objective Brain Teasers</i>	364
	<i>Conventional Brain Teasers</i>	368

CHAPTER 14**Impact of Jets371-386**

14.1	Introduction	371
14.2	Force by fluid jet on stationary flat plate	371
14.3	Force by fluid jet on moving flat plate	375
14.4	Force by fluid jet on curved plate	377
14.5	Flow over runner blades	381
	<i>Objective Brain Teasers</i>	383
	<i>Conventional Brain Teasers</i>	384

CHAPTER 15**Hydraulic Turbines.....387-421**

15.1	Introduction	387
15.2	Layout of Hydroelectric Power Plant	387
15.3	Heads of a Turbine	388
15.4	Efficiencies of a Turbines	388
15.5	Classification of Turbines	390
15.6	Pelton Turbine	393
15.7	Radial Flow turbine	398
15.8	Francis turbine	400
15.9	Kaplan Turbine	403
15.10	Comparison of Kaplan and Francis Turbine	404
15.11	Draft Tube	404
15.12	Cavitation in Reaction turbine	408
15.13	Unit Quantities and Specific Speed	409
15.14	Performance Characteristic Curves	411
	<i>Objective Brain Teasers</i>	413
	<i>Conventional Brain Teasers</i>	418

CHAPTER 16

Hydraulic Pumps 422-458

16.1 Introduction 422

16.2 Classification of rotodynamics pumps..... 423

16.3 Centrifugal Pump 424

16.4 Heads of Pump 428

16.5 Design parameters of centrifugal pump..... 430

16.6 Efficiencies of Centrifugal Pump..... 431

16.7 Multistage centrifugal pumps 434

16.8 Minimum Speed for Starting a Centrifugal Pump 435

16.9 Specific speed of centrifugal pump..... 436

16.10 Model Testing of Centrifugal Pumps 437

16.11 Cavitation in Pumps..... 439

16.12 Net Positive Suction Head (NPSH)..... 440

16.13 Thoma's Cavitation Factor 441

16.14 Priming of Pump..... 441

16.15 Characteristic Curves of Centrifugal Pumps 442

16.16 Reciprocating Pump..... 443

16.17 Centrifugal pump vs Reciprocating pump..... 448

Objective Brain Teasers..... 451

Conventional Brain Teasers..... 456



Fluid Properties

1.1 INTRODUCTION

- A substance in the liquid or gas phase is referred as a fluid.
 - Fluid is capable of flowing and conforms to the shape of the containing vessel.
 - Fluid undergoes continuous deformation under the influence of shearing forces no matter how small the forces may be.
 - This property of continuous deformation in technical terms is known as 'flow property', whereas this property is absent in solids.
 - The distinction between a solid and a fluid is made on the basis of their ability to resist an applied shear stress. A solid can resist an applied shear stress by deforming itself by a fixed amount. On the other hand, a fluid shows its flow property under the application of shear stresses due to which it deforms continuously and does not come back to its previous position.
 - In case of solids, total deformation is significant, whereas, in case of fluids, rate of deformation is significant in defining the properties.
 - If a fluid is at rest, there can be no shearing forces acting and therefore, all forces in the fluid must be perpendicular to the planes upon which they act.
 - Fluids may be classified as Ideal fluids or real fluids.
- (i) **Ideal Fluids:** Ideal fluids are those fluids which have neither viscosity nor surface tension and they are incompressible. In nature, the ideal fluids do not exist and therefore, they are only imaginary fluids.
- (ii) **Real Fluids:** Practical or real fluids are those fluids which possess viscosity, surface tension and compressibility.

1.2 FLUID MECHANICS

- Fluid mechanics is the study of fluids at rest (fluid statics) or in motion (fluid dynamics).
- The basic laws which are applicable to any fluid for analysis of any problem in fluid mechanics, are
 - (i) The law of conservation of mass
 - (ii) Newton's second law of motion
 - (iii) The principle of angular momentum
 - (iv) The first law of thermodynamics
 - (v) The second law of thermodynamics

1.3 FLUID AS A CONTINUUM

- In a fluid system on macro scale, the intermolecular spacing between the fluid particles is treated as negligible and the entire fluid mass system is assumed as continuous distribution of mass, and such continuous mass of fluid is known as continuum.
- This assumption is valid only if the fluid system is very large as compared to the spacing between the particles. (Continuum is invalid at low pressure i.e. at high elevation)
- As a consequence of the continuum, each fluid property is assumed to have a definite value at every point in space. Thus, the fluid properties such as density, temperature and velocity etc., are considered as continuous functions of position and time.

For Example:

Velocity field, $\vec{V} = \vec{V}(x, y, z, t)$ or $\vec{V} = u\hat{i} + v\hat{j} + w\hat{k}$

where, each velocity component, u , v and w will be a function of x , y , z and t .

$\vec{V}(x, y, z, t)$ indicates the velocity of a fluid particle that is passing through the point x , y , z at time instant t .

Thus, the velocity is measured at the same location at different points of time.

In case of steady flow,

$$\frac{\partial \vec{V}}{\partial t} = 0$$

Therefore,

$$\vec{V} = \vec{V}(x, y, z)$$

1.3.1 The No Slip Condition

- Consider the flow of a fluid over a stationary solid surface that is non-porous. As per the experimental observation, it has been found out that a fluid in motion comes to a complete stop at the surface of solid body and assumes zero relative velocity with solids surface. It represents that the fluid in direct contact with a solid, stick to the surface and there is no slip. This is known as “no slip condition”.
- The fluid property responsible for the no slip condition and development of the boundary layer is viscosity.
- The no slip condition is responsible for the development of velocity profile.
- Another consequence of no slip condition is the surface drag or skin friction drag.

1.4 FLUID PROPERTIES

- Any characteristic of a fluid system is called a fluid property.
- Fluid properties are of two types:
 - Intensive Properties:** Intensive properties are those that are independent of the size of the system or the amount of material in it. **Example:** Temperature, pressure, density etc.
 - Extensive Properties:** Extensive properties are those whose values depend on the size or extent of the system. **Example:** Total mass, total volume, total momentum etc.
- Following are some of the intensive and extensive properties of a fluid system.
 - Viscosity
 - Surface tension
 - Vapour pressure
 - Compressibility and elasticity

1.4.1 Some other Important Properties

1. **Mass Density:** Mass density or specific mass (ρ) of a fluid is the mass which it possesses per unit volume. Its SI unit is kg/m^3 .

$$\rho = \frac{\text{Mass of fluid}}{\text{Volume of fluid}}$$

2. **Specific Weight:** Specific weight or weight density (γ) of a fluid is the weight it possesses per unit volume. Its SI unit is N/m^3 . The mass density and specific weight γ has following relationship:

$\gamma = \rho g$; $\rho = \gamma/g$. Both mass density and specific weight depend upon temperature and pressure.

3. **Relative Density (R.D.):** It is defined as the ratio of density of one substance to the density of

other substance. Mathematically, $\rho_{1/2} = \frac{\rho_1}{\rho_2}$.

where, $\rho_{1/2}$ = Relative density of substance '1' with respect to substance '2'.

4. **Specific Gravity:** Specific gravity (S) is the ratio of specific weight (or mass density) of a fluid to the specific weight (or mass density) of a standard fluid. The standard fluid chosen for comparison is pure water at 4°C for liquids and air or hydrogen for gases at some specified temperature and pressure.

$$S(\text{for liquid}) = \frac{\text{Specific weight of liquid}}{\text{Specific weight of water}} = \frac{\text{Specific weight of liquid}}{9810 \text{ N/m}^3}$$

$$S(\text{for gases}) = \frac{\text{Specific weight of gas}}{\text{Specific weight of air}}$$

If specific gravity $< 1 \Rightarrow$ Fluid is lighter than standard fluid.

If specific gravity $> 1 \Rightarrow$ Fluid is heavier than standard fluid.

Specific gravity is unitless property.

5. **Specific Volume:** Specific volume of a fluid is the volume of fluid per unit mass. Thus it is the reciprocal of density. It is generally denoted by v . Its SI unit is m^3/kg .

Example 1.1

Three litres of petrol weigh 23.7 N. Calculate the mass density, specific weight, specific volume and specific gravity of petrol.

Solution :

$$\text{Mass density of petrol, } \rho_p = \frac{M}{V} = \frac{W/g}{V} = \frac{W}{gV} = \frac{23.7}{9.81 \times 3} = 0.805 \text{ kg/litre} = 805 \text{ kg/m}^3$$

$$\text{Mass density of water, } \rho_w = 1000 \text{ kg/m}^3$$

$$\text{Specific gravity of petrol} = \frac{\rho_p}{\rho_w} = \frac{805}{1000} = 0.805$$

$$\text{Specific weight of petrol} = \frac{W}{V} = \frac{23.7}{3.0} = 7.9 \text{ N/litre} = 7.9 \text{ kN/m}^3$$

$$\text{Specific volume} = \frac{V}{M} = \frac{1}{\rho_p} = \frac{1}{805} = 1.242 \times 10^{-3} \text{ m}^3/\text{kg}$$

1.5 VISCOSITY

- Viscosity is the property of fluids by virtue of which they offer resistance to shear or angular deformation.
- It is primarily due to cohesion (in case of liquids) and molecular momentum exchange (in case of gases) between fluid layers, and as flow occurs, these effects appear as shearing stresses between the moving layers.

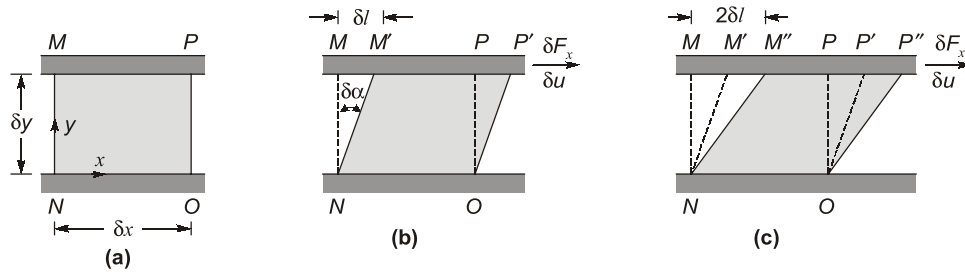


Fig: (a) Fluid element at time t , **(b)** Deformation of fluid element at time $t + \delta t$, and **(c)** Deformation of fluid element at time $t + 2\delta t$.

- Consider a fluid element between the two infinite plates. The rectangular fluid element is initially at rest at time t . Let us now suppose a constant rightward force δF_x is applied to the upper plate so that it is dragged across the fluid at constant velocity δu . The relative shearing action of the plates produces a shear stress, τ_{yx} , which acts on the fluid element and is given by

$$\tau_{yx} = \lim_{\delta A_y \rightarrow 0} \frac{\delta F_x}{\delta A_y} = \frac{dF_x}{dA_y},$$

where δA_y is the area of contact of the fluid element with the plate and δF_x is the force exerted by the plate on that element.

Various positions of the fluid element, illustrate the deformation of the fluid element from position $MNOP$ at time t , to $M'NOP'$ at time $t + \delta t$, to $M''NOP''$ at time $t + 2\delta t$, due to the imposed shear stress. The deformation of the fluid is given by

$$\text{Deformation rate} = \lim_{\delta t \rightarrow 0} \frac{\delta \alpha}{\delta t} = \frac{d\alpha}{dt}$$

Distance between the points M and M' is given by,

$$\delta l = \delta u \delta t \quad \dots(1)$$

Alternatively, for small angles,

$$\delta l = \delta y \delta \alpha \quad \dots(2)$$

Equating equations (1) and (2),

$$\delta u \delta t = \delta y \delta \alpha$$

or

$$\frac{\delta \alpha}{\delta t} = \frac{\delta u}{\delta y}$$

Taking the limits of both sides

$$\lim_{\delta t \rightarrow 0} \frac{\delta \alpha}{\delta t} = \lim_{\delta t \rightarrow 0} \frac{\delta u}{\delta y}$$

$$\frac{d\alpha}{dt} = \frac{du}{dy}$$

Thus, the rate of angular deformation is equal to velocity gradient across the flow.

1.5.1 Newton's law of viscosity

- According to Newton's law of viscosity, shear stress is directly proportional to the rate of deformation or velocity gradient across the flow.

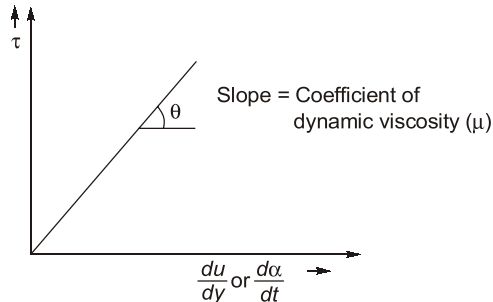


Fig. Newton's law of viscosity

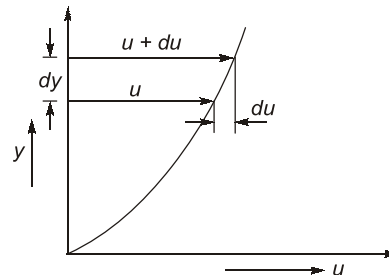


Fig. Velocity profile

Thus,

$$\tau \propto \frac{du}{dy}$$

$$\tau = \mu \frac{du}{dy}$$

where,

μ = Coefficient of dynamic viscosity

Dynamic Viscosity (μ)

- Dimension of μ = $[M L^{-1} T^{-1}]$
- Unit of μ = Ns/m^2 or $Pa \cdot s$
- In C. G. S. units, μ is expressed as 'poise', 1 poise = $0.1 N \cdot s/m^2$
- A $20^\circ C$ and at standard atmospheric pressure, $(\mu)_{water} \approx 10^{-3} Ns/m^2$;
 $(\mu)_{air} \approx 1.81 \times 10^{-5} Ns/m^2$



- Water is nearly 55 times viscous than air.
- Linearization of Newton's law of viscosity:** If the flow is taking place between two parallel plates where the gap between the plates is very small then velocity gradient is assumed to be constant. If the gap is large then velocity gradient will be variable.

Kinematic Viscosity (ν)

- The kinematic viscosity (ν) is defined as the ratio of dynamic viscosity to mass density of the fluid. Therefore, $\nu = \mu/\rho$
- Dimension of ν = $[L^2 T^{-1}]$
- Unit of ν = m^2/s or cm^2/s (stoke, in C.G.S. units)
- 1 stoke = $10^{-4} m^2/s$
- At $20^\circ C$ and standard atmospheric pressure, $\nu_{water} = 1 \times 10^{-6} m^2/s$, $\nu_{air} = 15 \times 10^{-6} m^2/s$

NOTE: Kinematic viscosity of air is about 15 times greater than the corresponding value of water.

1.5.2 Variation of viscosity with Temperature

1. **Dynamic viscosity:** Increase in temperature causes a decrease in the dynamic viscosity of a liquid, whereas viscosity of gases increases with temperature growth.

The reason for the above phenomena is that; in liquids; viscosity is primarily due to molecular cohesion which decreases due to increase in volume due to temperature increment, while in gases, viscosity is due to molecular momentum transfer which increases due to increase in number of collision between gas molecules.

2. **Kinematic Viscosity:** Kinematic viscosity is ratio of dynamic viscosity to the density of fluid. In case of liquids with increase in temperature, the dynamic viscosity as well as density both decrease but decrease in dynamic viscosity is very high as compared to density. So, overall kinematic viscosity will decrease for liquids. On the other hand, in case of gases, with increase in temperature dynamic viscosity increases and density decreases. So overall kinematic viscosity increases for gases.

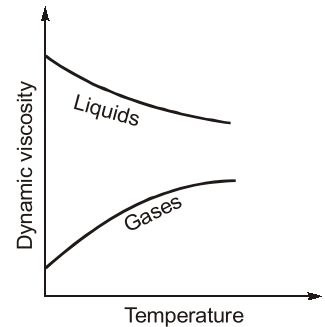


Fig: Variation of Dynamics Viscosity with Temperature

1.5.3 Variation of viscosity with pressure

1. **Dynamic viscosity:** In fluids, dynamic viscosity is practically independent of pressure except at extremely high pressure.
2. **Kinematic viscosity:** In liquids, kinematic viscosity is independent of pressure at low to moderate pressure.
In case of gases, density increases with increase in pressure, therefore kinematic viscosity decreases.

1.5.4 Types of Fluids

The fluids are classified into following types based on shear stress variation with velocity gradient:

(i) Newtonian Fluids

- Fluids which obey newton's law of viscosity are known as Newtonian fluids.
- General relationship between shear stress and velocity gradient is given by,

$$\tau = A \left(\frac{du}{dy} \right)^n + B$$

- For Newtonian fluids, $n = 1$, $A = \mu$ and $B = 0$,

Thus,

$$\tau = \mu \frac{du}{dy}$$

Examples: Air, water, Mercury, Petrol, Kerosene, etc.

(ii) Non-Newtonian Fluids

- Fluids for which shear stress is not directly proportional to deformation rate are Non-Newtonian fluids.

Examples: Toothpaste and paint.

- Non-Newtonian fluids are commonly classified as having time-independent or time-dependent behavior.

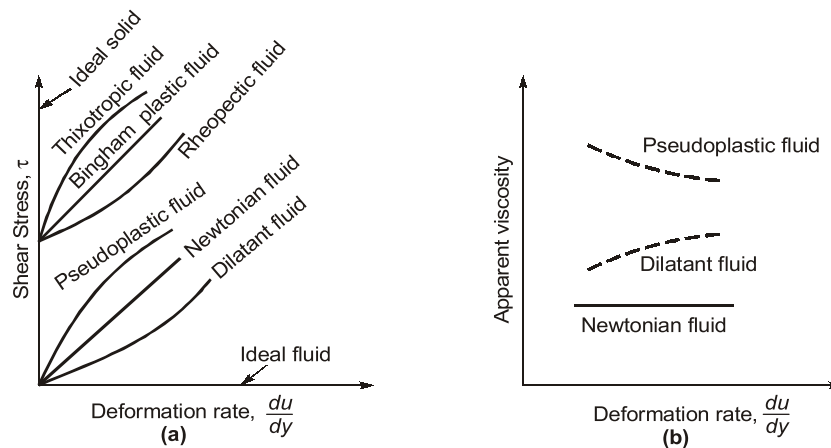


Fig: (a) Variation Shear stress rate with deformation **(b)** Variation of Apparent viscosity with deformation rate

- Relation between shear stress and rate of deformation for non-Newtonian fluid can be represented as:

$$\tau = A \left(\frac{du}{dy} \right)^n + B$$

where, n = flow behavior index; A = consistency index; B = Residual strength

Above equation can also be represented as:

$$\tau = A \left(\frac{du}{dy} \right)^{n-1} \left(\frac{du}{dy} \right) + B = \eta \frac{du}{dy} + B$$

where,

$$\eta = A \left(\frac{du}{dy} \right)^{n-1} \text{ is referred as the apparent viscosity}$$

NOTE: Dynamic viscosity (μ) doesn't depend on the shear rate, while apparent viscosity (η) depends on the shear rate.

- Various types of non-Newtonian fluids are :
 1. **Pseudoplastic fluids:** Fluids in which the apparent viscosity decreases with increasing deformation rate ($n < 1$) are called pseudoplastic fluids or shear thinning fluid. Most Non-Newtonian fluids fall into this group. These are time independent fluids.
Example: Polymer solutions, colloidal suspensions, milk, blood and paper pulp in water, etc.
 2. **Dilatant fluids:** If the apparent viscosity increases with increasing deformation rate ($n > 1$), then the fluid is termed as dilatant or shear thickening fluid. These are time independent fluids.
Example: Suspensions of starch, saturated sugar solution, etc.
 3. **Bingham Plastic fluids:** Fluids that behave as a solid until a minimum yield stress, τ_y , is reached and flow after crossing this stress are known as Ideal plastic or Bingham plastic fluids. The corresponding shear stress model is $\tau = \tau_y + \mu \frac{du}{dy}$.
Example: Clay suspensions, drilling muds, sewage sludge, creams, toothpaste, etc.
 4. **Thixotropic fluid:** Apparent viscosity (η) for thixotropic fluids decreases with time under a constant applied shear stress. These are time dependent fluids.
Example: Paints, printer inks, etc.

5. **Rheopectic fluid:** Apparent viscosity (η) for rheopectic fluids increases with time under constant shear stress. These are time dependent fluids.

Example: Gypsum pastes.



- **Viscoelastic fluids:** Fluids which after some deformation partially return to their original shape when the applied stress is released are called viscoelastic fluids. Example, polymerised fluid with drag reduction features.
- **Rheology:** It is the branch of science which deals with the studies of different types of fluid behaviours.

Example 1.2

If the velocity profile of a fluid over a plate is parabolic with free stream velocity of 120 cm/s occurring at 20 cm from the plate, calculate the velocity gradients and shear stress at a distance of 0, 10 and 20 cm from the plate. Take the viscosity of the fluid as 8.5 poise.

Solution:

Given:

Distance of surface from plate = 20 cm

Velocity at surface, $U = 120 \text{ cm/s}$

Viscosity, $\mu = 8.5 \text{ poise} = \frac{8.5}{10} \text{ Ns/m}^2 = 0.85 \text{ Ns/m}^2$

The velocity profile is given as parabolic. Hence equation of velocity profile is

$$u = ay^2 + by + c \quad \dots(i)$$

where a, b and c are constants. Their values are determined from boundary conditions as:

(a) at $y = 0, u = 0$

(b) at $y = 20 \text{ cm}, u = 120 \text{ cm/s}$

(c) at $y = 20 \text{ cm}, \frac{du}{dy} = 0$

Boundary condition (a) on substitution in equation (i), gives

$$c = 0$$

Boundary condition (b) on substitution in equation (i) gives

$$120 = a(20)^2 + b(20) = 400a + 20b \quad \dots(ii)$$

Boundary condition (c) on substitution in equation (i) gives

$$\frac{du}{dy} = 2ay + b \quad \dots(iii)$$

$$\text{or} \quad 0 = 2 \times a \times 20 + b = 40a + b$$

Solving equations (ii) and (iii) for a and b

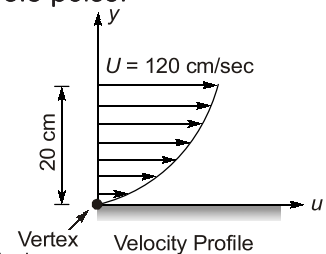
From equation (iii), $b = -40a$

Substituting this value in equation (ii), we get

$$\begin{aligned} 120 &= 400a + 20 \times (-40a) \\ &= 400a - 800a = -400a \end{aligned}$$

$$\therefore a = \frac{120}{-400} = -\frac{3}{10} = -0.3$$

$$\therefore b = (-40) \times (-0.3) = 12.0$$



Substituting the values of a , b and c in equation (i)

$$u = -0.3 y^2 + 12 y$$

Velocity Gradient

$$\frac{du}{dy} = -0.3 \times 2y + 12 = -0.6y + 12$$

at $y = 0$, Velocity gradient, $\left(\frac{du}{dy}\right)_{y=0} = -0.6 \times 0 + 12 = 12$ per sec

at $y = 10$ cm, $\left(\frac{du}{dy}\right)_{y=10} = -0.6 \times 10 + 12 = -6 + 12 = 6$ per sec

at $y = 20$ cm, $\left(\frac{du}{dy}\right)_{y=20} = -0.6 \times 20 + 12 = -12 + 12 = 0$

Shear Stresses

Shear stress is given by $\tau = \mu \frac{du}{dy}$

(i) Shear stress at $y = 0$, $\tau = \mu \left(\frac{du}{dy}\right)_{y=0} = 0.85 \times 12.0 = 10.2 \text{ N/m}^2$

(ii) Shear stress at $y = 10$, $\tau = \mu \left(\frac{du}{dy}\right)_{y=10} = 0.85 \times 6.0 = 5.1 \text{ N/m}^2$

(iii) Shear stress at $y = 20$, $\tau = \mu \left(\frac{du}{dy}\right)_{y=20} = 0.85 \times 0 = 0$

Example 1.3

Two large plane surfaces are 2.4 cm apart. The space between the surfaces is filled with glycerin. What force is required to drag a very thin plate of surface area 0.5 square metre between the two large plane surfaces at a speed of 0.6 m/s, if:

- (i) the thin plate is in the middle of the two plane surfaces, and
- (ii) the thin plate is at a distance of 0.8 cm from one of the plane surfaces?

Take the dynamic viscosity of glycerin = $8.10 \times 10^{-1} \text{ Ns/m}^2$. Assume linear velocity distribution in transverse direction.

Solution :

Given:

Distance between two large surfaces = 2.4 cm

Area of thin plate, $A = 0.5 \text{ m}^2$

Velocity of thin plate, $u = 0.6 \text{ m/s}$

Viscosity of glycerin, $\mu = 8.10 \times 10^{-1} \text{ Ns/m}^2$

Case-I: When the thin plate is in the middle of the two plane surfaces.

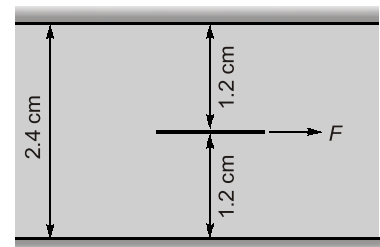


Fig: Case-I



**OBJECTIVE
BRAIN TEASERS**

Q.1 If the dynamic viscosity of a liquid is 0.012 poise and its R.D. is 0.79, then its kinematic viscosity in stoke is

- (a) 0.0152 (b) 0.152
(c) 1.52 (d) 15.20

Q.2 The velocity distribution, in m/s near the solid wall at a section in a laminar flow is given by $u = 5 \sin(5\pi y)$. If $\mu = 5$ poise, the shear stress at $y = 0.05\text{m}$, in N/m^2 is

- (a) 39.27 (b) 27.77
(c) 38.9 (d) 26.66

Q.3 Kinematic viscosity of fluid depends upon

- (a) Temperature (b) Pressure
(c) Density (d) Surface tension
(a) 1 and 2 (b) 1 and 3
(c) 1, 2 and 3 (d) 1, 2, 3 and 4

[MSQ]

Q.4 A fluid indicated the following shear stress and deformation rates :

$\frac{du}{dy}$ (units)	0	1	2	4
τ (units)	10	15	20	30

This fluid is classified as

- (a) Newtonian (b) Bingham Plastic
(c) Dilatant (d) Pseudoplastic

Q.5 Kerosene is known to have a bulk modulus of elasticity $K = 1.43 \times 10^9 \text{ N/m}^2$ and a relative density of 0.806. The speed of sound in kerosene, (in m/s) is

- (a) 1332 (b) 1075
(c) 1197 (d) 184

Q.6 If 5.66 m^3 of oil weighs 4765 kg, then its mass density, specific weight and specific gravity respectively are

- (a) 841.87 kg/m^3 , 8.26 kN/m^3 and 0.842
(b) 8.26 kg/m^3 , 841 kN/m^3 and 8.42

- (c) 841.87 kg/m^3 , 841 kN/m^3 and 8.42
(d) None of these

Q.7 A reservoir of capacity 0.01 m^3 is completely filled with a fluid of coefficient of compressibility $0.75 \times 10^{-9} \text{ m}^2/\text{N}$. The amount of fluid that spill over (in m^3), if pressure in the reservoir is reduced by $2 \times 10^7 \text{ N/m}^2$ is

- (a) 0.15×10^{-4} (b) 1×10^{-4}
(c) 1.5×10^{-4} (d) None of these

Q.8 Assuming that sap in trees has the same characteristic as water and that it rises purely due to capillary phenomenon, what will be the average diameter of capillary tubes in a tree if the sap is carried to a height of 10 m? (Take surface tension of water = 0.0735 N/m & $\theta = 0^\circ$)

- (a) 0.003 mm (b) 0.03 mm
(c) 0.3 mm (d) 0.006 mm

Q.9 A small circular jet of mercury 0.1 mm in diameter issue from an opening. What is the pressure difference between the inside and outside of the jet when at 20°C ? (Surface tension of mercury at 20°C is 0.514 N/m)

- (a) 41 kPa (b) 21.5 kPa
(c) 10.28 kPa (d) 5.14 kPa

Q.10 An apparatus produces water droplets of diameter $70 \mu\text{m}$. If the coefficient of surface tension of water in air is 0.07 N/m , the excess pressure in these droplets, in kPa, is

- (a) 5.6 (b) 4.0
(c) 8.0 (d) 13.2

Q.11 If the surface tension of water air interface is 0.073 N/m , the gauge pressure inside a rain drop of 1 mm diameter is

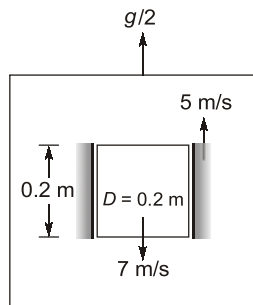
- (a) 146.0 N/m^2 (b) 0.146 N/m^2
(c) 73.0 N/m^2 (d) 292.0 N/m^2

Q.12 The capillary rise in a 3 mm tube immersed in a liquid is 15 mm. If another tube of diameter 4 mm is immersed in the same liquid, the capillary rise would be

- (a) 11.25 mm (b) 20.00 mm
(c) 8.44 mm (d) 26.67 mm

- Q.13** A cylinder of 0.2 m diameter and 0.5 m length, is moving inside a shaft with a constant velocity of 7 m/s in downward direction. Shaft is moving upwards with 5 m/s velocity. Gap between shaft and cylinder is filled with oil. The whole assembly is in a lift which is moving with an acceleration of $\frac{g}{2}$ m/s² in upward direction. If

gap between cylinder and shaft is 2 mm and mass of cylinder is 100 gm then viscosity of oil is _____ $\times 10^{-4}$ Ns/m²



- Q.14** A Newtonian fluid fills the clearance between a shaft and a sleeve. When a force of 800 N is applied to the shaft, parallel to the sleeve, the shaft attains a speed of 1.5 cm/s. If a force of 2.4 kN is applied instead, the shaft would move with a speed of
- (a) 1.5 cm/s (b) 13.5 cm/s
(c) 0.5 cm/s (d) 4.5 cm/s

- Q.15** The bulk modulus of elasticity for a liquid
- (a) is function of both temperature and pressure
(b) at any given temperature decreases continuously with pressure
(c) at any pressure increases continuously with temperature
(d) is a constant

- Q.16** The height of liquid in a capillary tube
- (a) increases with an increase in diameter
(b) increases with a decrease in diameter
(c) increases with an increase in surface tension.
(d) increase with an increase in specific weight.

[MSQ]

- Q.17** Newton's Law of viscosity relates
- (a) pressure, velocity and viscosity.
(b) shear stress and rate of angular deformation in a fluid.
(c) shear stress, temperature, velocity and viscosity.
(d) pressure, viscosity and rate of angular deformation.

- Q.18** A pressure increase of 200 N/cm² increases the density of water by 0.1%. The bulk modulus of elasticity (in GN/m²) of water is ____.

- Q.19** Which one of the following statement is correct?
- (a) Surface tension of a liquid decreases with temperature
(b) Vapour pressure of a liquid is independent of the externally exerted pressure
(c) Dynamic viscosity is the force per unit velocity gradient
(d) Viscosity of a liquid decreases with increase in temperature

[MSQ]

- Q.20** A U-tube has two limbs of internal diameter 6 mm and 16 mm respectively and contains some water. Surface tension of water is 0.05 N/m and angle of contact is 0°. The difference in water levels in the two limbs is ($g = 9.81$ m/s²)
- (a) 1.5 mm (b) 2.5 mm
(c) 2.8 mm (d) 2.1 mm

- Q.21** If the surface tension at the soap-air interface is 0.5 N/m, then the internal pressure in a soap bubble of 5 cm diameter is ____ (N/m²).

- Q.22** Arrange the following sizes of glass tube in increasing order of capillary rise of water.
1. 5 mm 2. 2 mm
3. 10 mm 4. 1 mm
(a) 1, 2, 3 and 4 (b) 4, 2, 1 and 3
(c) 4, 1, 2 and 3 (d) 3, 1, 2 and 4

- Q.23 Assertion (A):** The coefficient of dynamic viscosity (μ) as its nomenclature indicates, is an absolute constant for a given fluid.

Reason (R): Newton's universally accepted definition for absolute viscosity shows that it is a coefficient in the form of a ratio

- (a) Both A and R true and R is the correct explanation of A
(b) Both A and R are true R is not the correct explanation of A
(c) A is true but R is false
(d) A is false but R is true

■■■■

ANSWER KEY

1. (a) 2. (b) 3. (a, b, c) 4. (b)
5. (a) 6. (a) 7. (c) 8. (a) 9. (c)
10. (b) 11. (d) 12. (a) 13. (7.807) 14. (d)
15. (a) 16. (b, c) 17. (b) 18. (2) 19. (a, d)
20. (d) 21. (80) 22. (d) 23. (d)

HINTS & EXPLANATIONS

8. (a)

$$h = \frac{2\sigma \cos \theta}{\rho g r}$$

$$\Rightarrow 10 = \frac{2 \times 0.0735 \times \cos 0^\circ \times 2}{1000 \times 9.81 \times d}$$

$$\Rightarrow d = 3 \times 10^{-6} \text{ m}$$

$$\Rightarrow d = 0.003 \text{ mm}$$

13. 7.807 (7.8 to 7.9)

Since cylinder is moving with constant velocity. It is in force equilibrium.

So, Effective weight = Viscous force

$$\text{Effective weight} = m \left(g + \frac{g}{2} \right) = \frac{3}{2} mg$$

$$\text{Viscous force} = \mu \frac{du}{dy} \times \text{Area}$$

[Here u will be u_{relative}]

$$\text{So, } u_r = 7 + 5 = 12 \text{ m/s}$$

$$\frac{3}{2} mg = \mu \frac{du}{dy} \cdot (2\pi D \times L)$$

$$\frac{3}{2} \times (0.1) \times 9.81 = \mu \times \frac{12}{(2 \times 10^{-3})} (2\pi \times 0.1) \times 0.5$$

$$\mu = 7.807 \times 10^{-4} \text{ Ns/m}^2$$

18. (2)

$$K = \frac{\Delta p}{\frac{\Delta V}{V}} = \frac{\Delta p}{\frac{\Delta p}{\rho}}$$

$$\therefore K = \frac{200}{0.001} \times 10^4 \text{ N/m}^2$$

$$= 2 \text{ GN/m}^2$$

19. (a, d)

- Surface tension decreases with increase in temperature.
- Viscosity of a liquid decrease with increase in temperature.

20. (d)

Let h = difference in water levels in the two limbs

$$\theta = 0^\circ$$

$$\therefore \Delta P = \rho g h = \left(\frac{2\sigma}{R_1} - \frac{2\sigma}{R_2} \right)$$

$$h \times 9.81 \times 10^3 = 2 \times 0.05 \left(\frac{1}{3 \times 10^{-3}} - \frac{1}{8 \times 10^{-3}} \right)$$

$$\therefore h = 2.12 \times 10^{-3} \text{ m} = 2.12 \text{ mm}$$

21. (80)

In a soap bubble, there are two interfaces

$$\therefore \Delta p = \frac{4\sigma}{R} = \frac{4 \times 0.5}{2.5 \times 10^{-2}}$$

$$= 80 \text{ N/m}^2$$

22. (d)

$$h = \frac{4\sigma \cos \theta}{d \gamma_w}$$

$$\therefore h \propto \frac{1}{d}$$

23. (d)

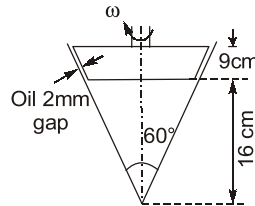
For a given fluid, ' μ ' changes with temperature and hence it is NOT an absolute constant for a given fluid.

■■■■



CONVENTIONAL BRAIN TEASERS

- Q.1** For the truncated cone as shown in the given figure. Calculate the torque required if the cone is rotated at 200 rpm. Viscosity of oil in the 2 mm gap between the cone and the housing is 2 poise.

**Solution :**

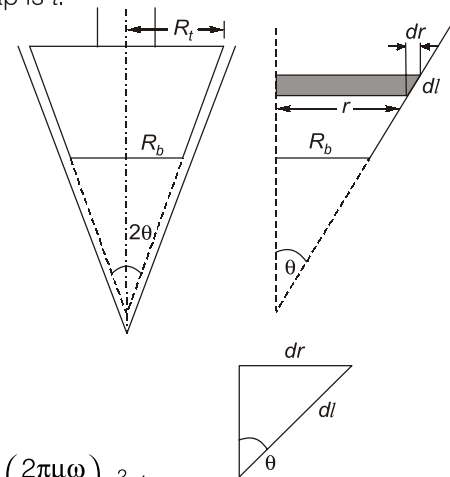
Consider the truncated cone as shown in figure, let R_t and R_b be the radii at top and bottom of the cone of the vertex angle 2θ . Let the cone is rotated at angular speed of ω rad/s and the thickness of the gap is t .

Consider an elementary strip of the cone with radius r .

Shear stress on the sloping wall of the strip,

$$\tau = \mu \left(\frac{du}{dy} \right)$$

$$\tau = \mu \left(\frac{u}{t} \right) = \mu \left(\frac{r\omega}{t} \right)$$



$$\text{Area of sloping wall of strip} = 2\pi r (dl) = 2\pi r \left(\frac{dr}{\sin\theta} \right)$$

$$\therefore \text{Shear force on strip, } F = \tau \times \text{Area} = \left(\frac{\mu r \omega}{t} \right) \times \left(\frac{2\pi r dr}{\sin\theta} \right) = \left(\frac{2\pi\mu\omega}{t \sin\theta} \right) r^2 dr$$

Torque about central axis due to shear force on the strip, $dT = F \cdot r$

$$dT = \left(\frac{2\pi\mu\omega}{t \sin\theta} \right) r^3 dr$$

$$\therefore \text{Total torque, } T = \int_{R_b}^{R_t} dT = \frac{2\pi\mu\omega}{t \sin\theta} \int_{R_b}^{R_t} r^3 dr$$

$$\therefore T = \frac{2\pi\mu\omega}{t \sin\theta} \left[\frac{R_t^4}{4} - \frac{R_b^4}{4} \right]$$

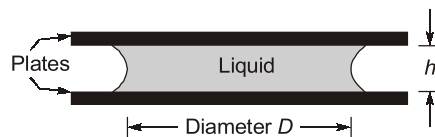
$$T = \frac{\pi\mu\omega}{2t \sin\theta} [R_t^4 - R_b^4] \quad \dots(i)$$

and $R_t = (16 + 9) \tan 30^\circ = 25 \tan 30^\circ = 14.43 \text{ cm} = 0.144 \text{ m}$
 $R_b = 16 \tan 30^\circ = 9.24 \text{ cm} = 0.0924 \text{ m}$
 $\therefore \mu = 2 \text{ poise} = \frac{2}{10} \text{ Ns/m}^2 = 0.2 \text{ Ns/m}^2, t = 2 \text{ mm} = 2 \times 10^{-3} \text{ m}$
 $\theta = 30^\circ, \omega = \frac{2\pi N}{60} = \frac{2\pi \times 200}{60} = 20.94 \text{ rad/s}$
 \therefore Putting these values in equation (i)

$$T = \frac{\pi \mu \omega}{2t \sin \theta} [R_t^4 - R_b^4] = \frac{\pi \times 0.2 \times 20.94}{2 \times 2 \times 10^{-3} \sin 30^\circ} [(0.144)^4 - (0.0924)^4]$$

$$= 2.35 \text{ Nm}$$

Q.2 A very small quantity of a liquid having a surface tension σ forms a circular spot of diameter D between two glass plates separated by a small distance h , (Given figure). Obtain an expression for the force required to pull the plates apart.



Solution :

Let p_0 and p_1 be the ambient pressure and pressure inside the liquid and Δp be the difference between them.

i.e. $\Delta p = p_1 - p_0$ {where, $p_0 > p_1$ }

The circular spot is stable if

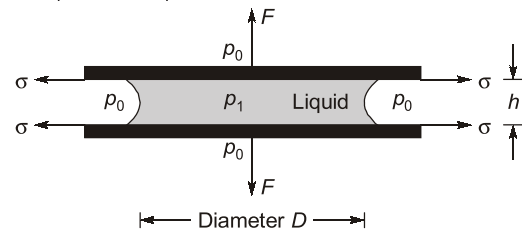
Total force on the liquid surface due to

difference in pressure = Total surface tension force

$$\pi D h (\Delta p) = 2\sigma (\pi D)$$

or

$$\Delta p = \frac{2\sigma}{h}$$



So, force required to pull the plates apart, $F = \left(\frac{\pi D^2}{4} \right) (\Delta p) = \frac{2\pi D^2 \sigma}{4h} = \frac{\pi}{2} \left(\frac{D}{h} \right) (\sigma D)$

■■■■■