

CIVIL ENGINEERING

Strength of Materials



Comprehensive Theory
with Solved Examples and Practice Questions



MADE EASY
Publications

www.madeeasypublications.org



MADE EASY Publications Pvt. Ltd.

Corporate Office: 44-A/4, Kalu Sarai (Near Hauz Khas Metro Station), New Delhi-110016 | **Ph. :** 011-45124660, 9021300500
Email : infomep@madeeasy.in | **Web :** www.madeeasypublications.org

Strength of Materials

Copyright © by MADE EASY Publications Pvt. Ltd.
All rights are reserved. No part of this publication may be reproduced, stored in or introduced into a retrieval system, or transmitted in any form or by any means (electronic, mechanical, photo-copying, recording or otherwise), without the prior written permission of the above mentioned publisher of this book.



MADE EASY Publications Pvt. Ltd. has taken due care in collecting the data and providing the solutions, before publishing this book. In spite of this, if any inaccuracy or printing error occurs then **MADE EASY Publications Pvt. Ltd.** owes no responsibility. We will be grateful if you could point out any such error. Your suggestions will be appreciated.

EDITIONS

First Edition : 2015
Second Edition : 2016
Third Edition : 2017
Fourth Edition : 2018
Fifth Edition : 2019
Sixth Edition : 2020
Seventh Edition : 2021
Eighth Edition : 2022

Ninth Edition : 2023

CONTENTS

Strength of Materials

CHAPTER 1

Properties of Materials01-21

1.1	Introduction	1
1.2	Stress	1
1.3	Strain	3
1.4	Tensile Test for Mild Steel.....	4
1.5	Properties of Metals.....	7
1.6	Creep.....	8
1.7	Stress Relaxation.....	9
1.8	Elasticity.....	9
1.9	Toughness.....	11
1.10	Fatigue.....	11
1.11	Failure of Materials in Tension and Compression.....	12
	<i>Objective Brain Teasers</i>	14
	<i>Conventional Brain Teasers</i>	18

CHAPTER 2

Simple Stress and Strain22-107

2.1	Stress	22
2.2	Strains	25
2.3	Matrix Representation of Stress and Strain.....	27
2.4	Differential Form of Strains	29
2.5	Allowable Stresses.....	30
2.6	Volumetric Strain ($\bar{\epsilon}$)	31
2.7	Hooke's Law	31
2.8	Elastic Constants	32
2.9	Applications of Hooke's Law.....	35
2.10	Applications of Volumetric Strain	36
2.11	Deflection of Axially Loaded Members	40
2.12	Statically Indeterminate Axial Loaded Structures	56
2.13	Axial Deflection in Interconnected Members	60
2.14	Strain Energy	63
2.15	Thermal Stresses	66

2.16	Temperature Stresses in Composite Bar.....	73
2.17	Stresses in Bolts and Nuts.....	82
	<i>Objective Brain Teasers</i>	92
	<i>Conventional Brain Teasers</i>	103

CHAPTER 3

Shear Force and Bending Moment 108-218

3.1	Introduction	108
3.2	Supports	108
3.3	Beam	110
3.4	Loads.....	112
3.5	Stability in 2-D Structures.....	113
3.6	External Support Reactions in Beams	115
3.7	Shear Force and Bending Moment	119
3.8	Shear Force and Bending Moment Diagram	122
3.9	Curve Tracing for SFD and BMD	124
3.10	Example of Shear Force and Bending Moment Diagrams.....	125
3.11	Relationship between Load, Shear Force and Bending Moment.....	126
3.12	Important Points about Shear Force Diagrams and Bending Moment Diagrams Derived from Relationship.....	130
3.13	Maximum Bending Moment.....	131
3.14	SFD and BMD by Integration.....	140
3.15	Effect of Concentrated Moment on SFD and BMD...	151
3.16	Shear Force and Bending Moment Diagrams for Frames	158
3.17	Loading Diagram and BMD from SFD.....	167
3.18	Loading Diagram from BMD.....	172
3.19	Elastic Curves Using Bending Moment Diagram	177
	<i>Objective Brain Teasers</i>	192
	<i>Conventional Brain Teasers</i>	209

CHAPTER 4**Centroids and Moments of Inertia 219-244**

4.1 Centroid	219
4.2 Moment of Inertia	221
4.3 Product of Inertia.....	223
4.4 Parallel Axis Theorem	224
4.5 Perpendicular Axis Theorem.....	224
4.6 Properties of Plane Areas.....	224
4.7 Principal Axes and Principal Moments of Inertia	228
4.8 Rotation of Axes.....	228
<i>Objective Brain Teasers</i>	237
<i>Conventional Brain Teasers</i>	240

CHAPTER 5**Bending Stress in Beams..... 245-312**

5.1 Introduction	245
5.2 Simple bending or pure bending	245
5.3 Nature of Bending Stress	252
5.4 Section Modulus (Z)	254
5.5 Moment of Resistance	259
5.6 Bending Stresses in Axially Loaded Beams	263
5.7 Force on a Partial Area of a Section.....	267
5.8 Composite Beams.....	270
5.9 Flitched Beam	271
5.10 Beam of Uniform Strength	281
5.11 Unsymmetrical Bending	282
5.12 Biaxial Bending.....	284
<i>Objective Brain Teasers</i>	298
<i>Conventional Brain Teasers</i>	307

CHAPTER 6**Shear Stress in Beams 313-347**

6.1 Introduction	313
6.2 Shear Stress in Beams	313
6.3 Analysis of shear stress in different sections	315
6.4 Shear Stresses in Composite Sections	327
6.5 Shear Centre.....	328
6.6 Shear Flow.....	331

6.7 Shear Centres of Thin-walled Open Sections	332
6.8 Shear Centres of Some Important Sections.....	336
<i>Objective Brain Teasers</i>	340
<i>Conventional Brain Teasers</i>	345

CHAPTER 7**Transformation of Stresses 348-429**

7.1 Introduction	348
7.2 Plane Stresses.....	348
7.3 Principal Stresses and Maximum Shear Stress.....	351
7.4 Principal Stresses in Beams.....	363
7.5 Mohr's Circle	369
7.6 Hooke's law for Plane Stress.....	375
7.7 Analysis of Strain.....	378
7.8 Transformation Equation for Plane Strain.....	379
7.9 Strain Energy	384
7.10 Strain Rosette.....	386
7.11 Theories of Elastic Failure	391
<i>Objective Brain Teasers</i>	409
<i>Conventional Brain Teasers</i>	420

CHAPTER 8**Torsion of Shafts 430-495**

8.1 Introduction	430
8.2 Difference between Bending Moment and Twisting Moment	430
8.3 Assumptions Involved in the Theory of Pure Torsion	430
8.4 Shear Stress Distribution in Circular Section	437
8.5 Design of Shaft	438
8.6 Power Transmitted by Shaft.....	440
8.7 Series Combination of Shaft	443
8.8 Parallel Combination of Shaft	443
8.9 Strain Energy in Torsion.....	447
8.10 Torsion in Thin Walled Tubes	449
8.11 Torsion of Non-circular Section	453
8.12 Indeterminate Shaft.....	453
8.13 Shaft Subjected to Combined Bending Moment and Twisting Moment.....	456

8.14	Shaft Subjected to Combined Axial Force and Torsional Moment.....	461
8.15	Theories of Failure for Shaft Design.....	463
	<i>Objective Brain Teasers</i>	481
	<i>Conventional Brain Teasers</i>	489

CHAPTER 9

Deflection of Beams 496-603

9.1	Introduction	496
9.2	Double Integration Method	496
9.3	Moment Area Method (Mohr's Method).....	524
9.4	Conjugate Beam Method	545
9.5	Strain Energy Method.....	552
9.6	Method of Superposition	561
9.7	Application of Maxwell's Reciprocal Theorem	564
9.8	Slope and Deflection due to Temperature Change	566
	<i>Objective Brain Teasers</i>	581
	<i>Conventional Brain Teasers</i>	592

CHAPTER 10

Pressure Vessels 604-643

10.1	Thin Cylindrical Shell	604
10.2	Analysis of Thin Cylindrical Shell with Closed Flat Ends	604
10.3	Strains in Cylindrical Shell	606
10.4	Analysis of Thin Spheres.....	611
10.5	Strains in Sphere.....	611
10.6	Stresses in Riveted Cylindrical Shell.....	613
10.7	Thin Cylinders with Hemispherical Ends.....	614

10.8	Pressure Vessels Subjected to Axial Force	615
10.9	Thick Cylinder	619
10.10	Analysis of Stresses	620
10.11	Analysis of Thick Sphere.....	622
10.12	Design of Pressure Vessels	625
10.13	Strengthening of Cylinder.....	626
	<i>Objective Brain Teasers</i>	631
	<i>Conventional Brain Teasers</i>	633

CHAPTER 11

Theory of Columns 644-670

11.1	Compression Member	644
11.2	Types of Equilibrium.....	644
11.3	Euler's Theory for Buckling Failure.....	646
11.4	Maximum Lateral Deflection of Column.....	653
11.5	Rankine's Gordon Theory.....	654
11.6	Column with Eccentric Loading	656
11.7	Eccentric Loading about both x-axis and y-axis.....	660
	<i>Objective Brain Teasers</i>	663
	<i>Conventional Brain Teasers</i>	668

CHAPTER 12

Theory of Springs 671-682

12.1	Springs.....	671
12.2	Types of Springs.....	671
12.3	Springs in Series and Parallel.....	675
	<i>Objective Brain Teasers</i>	678
	<i>Conventional Brain Teasers</i>	682



Properties of Materials

1.1 INTRODUCTION

Strength of material is a branch of applied mechanics that deals with the behaviour of solid bodies subjected to various types of loading and internal forces developed due to these loading. A thorough understanding of mechanical behaviour is essential for the safe design of all structures, whether buildings, bridges, machines, motors, submarines or airplanes. Hence, strength of material is a basic subject in many engineering fields.

The objective of our analysis will be to determine the stresses, strains and deflections produced by the loads in different structures. Theoretical analysis and experimental results have equally important role in the study of strength of materials. So these quantities are found for all values of load upto the failure load, and then we will have a complete picture of the mechanical behaviour of the body.

The behaviour of a member subjected to forces depends not only on the fundamental law of Newtonian mechanics that govern the equilibrium of the forces but also on the mechanical characteristics of materials of which the member is fabricated. Sometimes, to predict the behaviour of material some necessary information regarding the characteristics of material comes from laboratory tests.

1.2 STRESS

The fundamental concept of stress can be understood by considering a prismatic bar that is loaded by axial force P at the ends as shown.

A prismatic bar is a straight structural member having constant cross-sectional area throughout its length. In the figure (a), axial force is acting away from the cross-section producing a uniform stretching of the bar, hence the bar is said to be in tension. Similarly in figure (c), axial force is acting towards the cross-section producing uniform compression of the bar, hence the bar is said to be in compression.

To investigate the internal stresses produced in the bar by axial forces, we make an imaginary cut at section mn as shown in figure (b) and (d). This section is taken perpendicular to the longitudinal axis of bar. Hence it is known as cross-section.

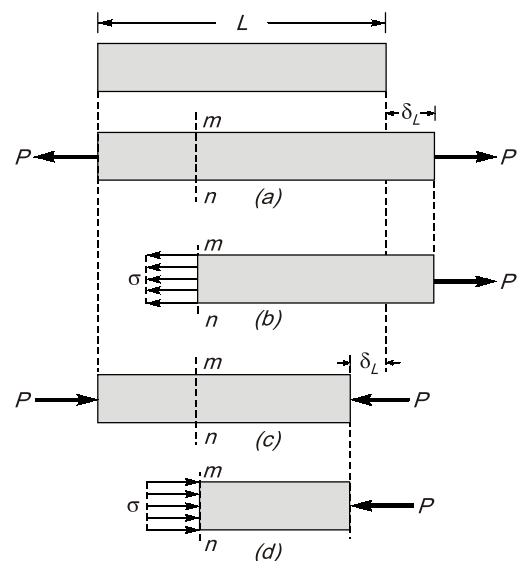


Fig. Axial stress

Now isolating the part of the bar to the right of the cut and considering the right of the cut as a free body. The force P has a tendency to move free body in the direction of load, so to restrict the motion of bar an internal force is induced which is uniformly distributed over cross-sectional area. The intensity of force developed, that is, internal force per unit area is called the **stress**.

Stress differs from pressure because pressure is defined as the externally applied force on unit area while stress is internal resistive force on unit area. To have better understanding of difference between externally applied force and internal resistance. Consider a bar suspended from a fixed end and a weight W is gradually applied at its free end as shown in figure.

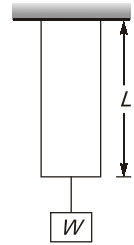


Fig. Axial load on bar

Case-I: Weight, W is applied gradually

Gradual loading means that value of load is zero at the starting time and gradually increases to value of W . Here, the bar gradually elongates with the increasing value of load. With increase in elongation, resistance forces say R will also increase gradually.

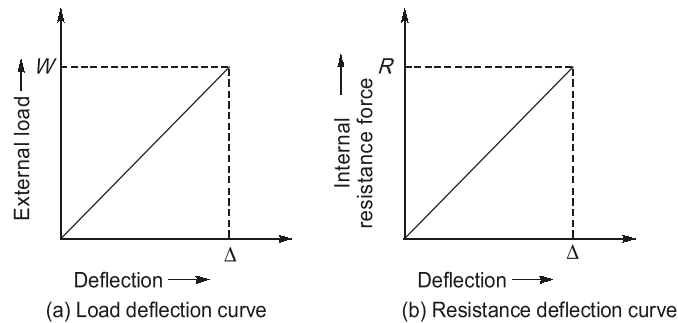


Fig. External load is applied gradually

Case-II: Weight, W is applied suddenly

Here, external load variation with elongation of bar is such as that its value instantly increases to W . This sudden load will result into elongation of bar say Δ . When external load is applied suddenly, resistance force will be set up in bar, but unlike external load which is sudden, resistance force has always linear variation with elongation of bar.

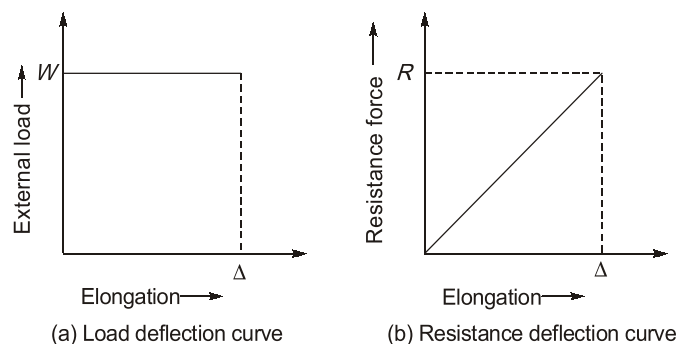


Fig. External load is applied suddenly

Now, as clear from figure (a) and (b), intensity of pressure is not equal to stress induced in bar.

Thus, stress can be defined as – “**Stress is the internal resistance of a material offered against deformation which is expressed in terms of force per unit area**”.

Stress induced in material depends upon the nature of force, point of application and cross-sectional area of material. Stress can be **tensile** or **compressive** in nature depending on the nature of load. Generally, stress is represented by the Greek letter σ . We can calculate stress mathematically as

$$\sigma = \frac{P}{A}$$

General Sign Convention:

Tensile stresses = +ve

Compressive stresses = -ve

Unit: (i) N/m² or Pa (SI unit)

(ii) N/mm² or MPa



- Stresses are induced only when motion of bar is restricted either by some force or reaction induced. If body or bar is free to move or free expansion is allowed, then no stresses will be induced.
- Pressure has same unit but pressure is different physical quantity than stress. Pressure is external normal force distributed over surface.

On the basis of cross-sectional area considered during calculation of stresses, direct stresses can be of following two types:

(a) Engineering or nominal stress : It is the stress where the original cross-sectional area of specimen is taken.

Mathematically, $\sigma = \frac{P}{A_0}$

where, A_0 = Original cross-sectional area of specimen taken

(b) True or actual stress : It is the stress where the actual cross-sectional area of specimen at any time of loading is considered.

Mathematically, $\sigma = \frac{P}{A_a}$

where, A_a = Actual cross-sectional area of specimen at any time of loading i.e. changed area of cross-section due to loading

$A_a = A_0 \pm \Delta A$ as per our convention '+' for compression and '-' for tension is taken.



- In tension, true or actual stress is always greater than engineering or nominal stress.
- In compression, true or actual stress is always less than engineering or nominal stress.

1.3 STRAIN

An axially loaded bar undergoes a change in length, becoming longer when in tension and shorter when in compression. The elongation or shortening in axially loaded member per unit length is known as strain. Strain is represented by ϵ .

Mathematically, strain can be calculated as

$$\epsilon = \frac{\Delta L}{L}$$

Strain is dimensionless quantity and is always expressed in the form of number. If the member is in tension then the strain is called tensile strain. If the member is in compression, then the strain is called compressive strain.

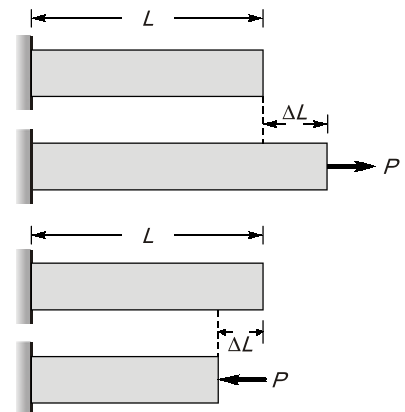


Fig. Strain in bars

On the basis of length of member used in calculation of strain, strain can be of following two types:

(a) Engineering or Nominal Strain: Engineering or nominal strain is strain calculated, when length of member is taken as original length

Mathematically, $\epsilon_0 = \frac{\Delta l}{l_0}$ where, l_0 = original length of member

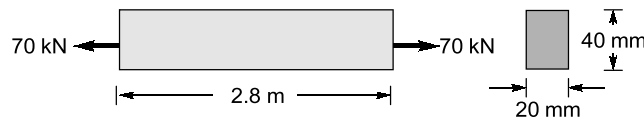
(b) True or Actual Strain : True or actual strain is strain calculated, when length of member is taken as actual length of member at loading

Mathematically, $\epsilon_a = \frac{\Delta l}{l_a}$ where, l_a = Actual length of member

$l_a = l_0 \pm \Delta l$ ' + ' sign for tension; ' - ' sign for compression

Example 1.1

A prismatic bar with rectangular cross-section (20 mm × 40 mm), length $L = 2.8$ m is subjected to an axial tensile force of 70 kN. The measured elongation of the bar is 1.2 mm. Calculate the tensile stress and strain in the bar.

**Solution:**

Assuming that force acts at CG of section. We know that,

$$\text{Stress, } \sigma = \frac{P}{A} = \frac{70 \times 10^3 \text{ N}}{20 \times 40 \text{ mm}^2} = 87.5 \text{ N/mm}^2 = 87.5 \text{ MPa}$$

and

$$\text{Strain, } \epsilon = \frac{\Delta L}{L} = \frac{1.2 \text{ mm}}{2.8 \times 1000 \text{ mm}} = 4.286 \times 10^{-4}$$

1.4 TENSILE TEST FOR MILD STEEL

The mechanical properties of materials used in engineering are determined by experiments performed on small specimen. These experiments are conducted in laboratories equipped with testing machines that are capable of loading in tension or compression.

The American Society for Testing and Materials (ASTM) has published guidelines for conducting test. Tensile test is generally conducted on Universal Testing Machine (UTM).

1.4.1 General Specifications of Specimen

- ♦ Specimen is solid cylindrical rod
- ♦ Gauge length 2" (inches)
- ♦ Diameter of middle section 0.5" (inches)
- ♦ L/D ratio = 4.0

1.4.2 Stress Strain Curve for Tension

- ♦ **A is limit of proportionality:** Beyond this linear variation ceases. Hooke's law is valid in OA.
- ♦ **B is elastic limit:** The maximum stress upto which a specimen regains its original length on removal of applied load. For mild steel, B is very near to A. However, for other materials B may be greater than A.

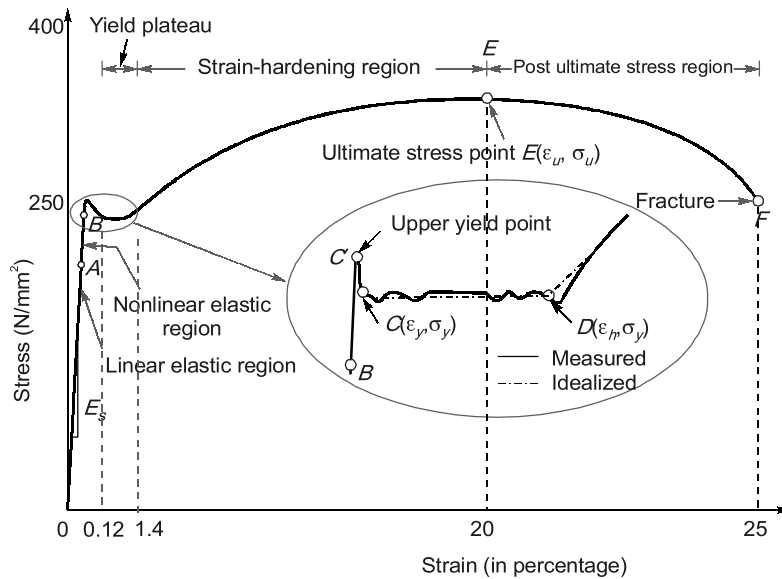


Fig. Ideal Tensile stress-strain diagram for Mild Steel

- **C' is upper yield point:** The magnitude of the stress corresponding to C' depends on the cross-sectional area, shape of the specimen and the type of the equipment used to perform the test. It has no practical significance.
- **C is lower yield point:** This is also called actual yield point. The stress at C is the yield stress (σ_y) with a typical value of $\sigma_y = 250 \text{ N/mm}^2$ (for mild steel). The yielding begins at this stress.
- **CD represents perfectly plastic region:** It is the strain which occurs after the yielding point C, without any increase in stress. The strain corresponding to point D is about 1.4% and corresponding to C is about 0.12% for mild steel. Hence, plastic strain is 10 to 15 times of elastic strain.
- **DE represents strain hardening region:** In this range further addition of stress gives additional strain. However, strain increases with faster rate in this region. The material in this range undergoes change in its crystalline structure, resulting in increased resistance to further deformation. This portion is not used for structural design.
- **E is ultimate point:** The stress corresponding to this point is ultimate stress (σ_u) and the corresponding strain is about 20% for mild steel.
- **F is fracture point:** Stress corresponding to this is called breaking stress and strain is called fracture strain. It is about 25% for mild steel.
- **EF post ultimate stress region:** In this range, necking occurs, i.e. area of cross-section is drastically decreased.



1. Strain that occurs before the yield point is called elastic strain and that which occurs after yield point with no increase in stress is called plastic strain. For mild steel, plastic strain is 10 to 15 times of elastic strain.
2. Ideal curve for tension is shown in figure. However actual behaviour is different and indicates apparently reduced yield stress in compression after strain hardening in tension. The divergence between tension and compression results is explained by Bauschinger and is called **Bauschinger effect**.

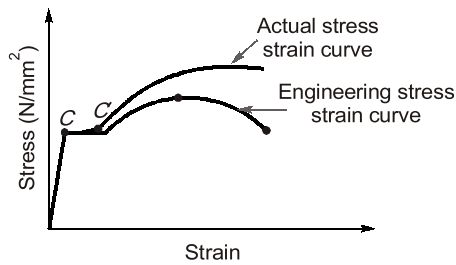
1.4.3 Actual Curve v/s Engineering Curve in Tension and Compression for Mild Steel

Fig. Tension curve for mild steel

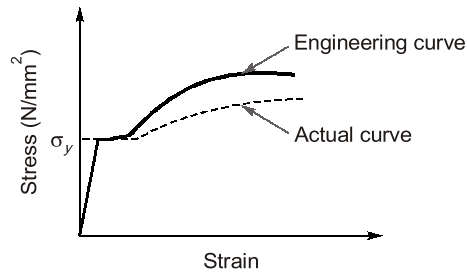


Fig. Compression curve for Mild steel



- The fracture strain depends upon % carbon present in steel.
- With increase in percentage carbon, fracture strain reduces.
- With increase carbon content, steel has higher yield stress and higher ultimate stresses.

- ♦ In compression, engineering stress-strain curve lies above the actual stress-strain curve, while in tension actual stress-strain curve lies above the engineering stress-strain curve.
- ♦ In compression mild steel has yield stress $\sigma_y = 263 \text{ N/mm}^2$, slightly greater than tension.
- ♦ Mild steel has same Young's modulus of elasticity in compression and tension, $E = 2.1 \times 10^5 \text{ N/mm}^2$.

Relation between engineering and actual stress

$$\sigma_a = \sigma_0(1 \pm \epsilon_0)$$

where, σ_a = Actual stress; σ_0 = Engineering stress; ϵ_0 = Engineering strain

As per our convention, for tension, take positive (+ve) sign and take negative (–ve) sign for compression.'

NOTE : While deriving above equation volume changes is neglected which is true in plastic region (Non-elastic region).

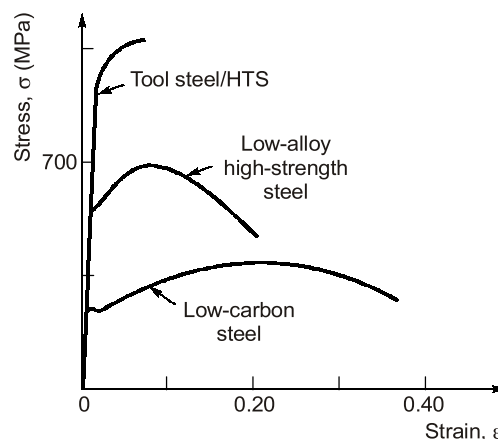
1.4.4 Stress-strain Curve for other Grades of Steel in Tension

Fig. Tensile stress-strain diagram for different grades of steel

**REMEMBER**

- All the grades of steel have same Young's modulus of elasticity.
- Among all steel grades high tension steel (HTS) is more brittle and mild steel is more ductile.
- High tension steel has higher ultimate strength than other grades of steel.

1.4.5 Stress-strain Curve for Different Materials

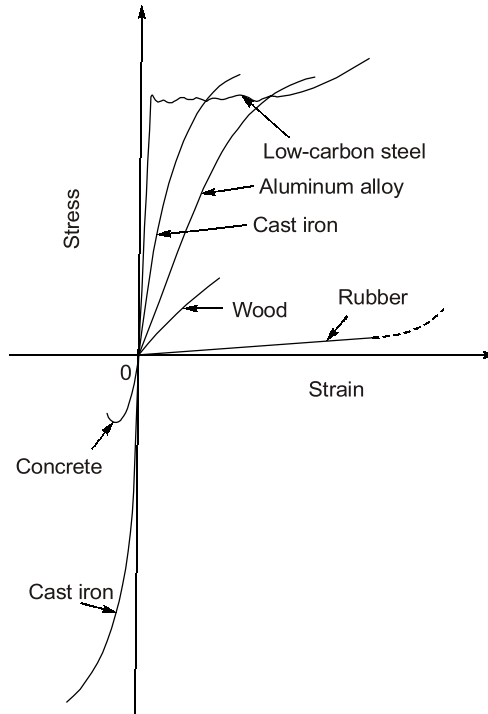


Fig. Stress-strain diagram for different material

1.5 PROPERTIES OF METALS

1.5.1 Ductility

Ductility is the property by which material can be stretched. Large deformations are thus possible in ductile materials before the absolute failure or rupture takes place. These materials have post-elastic strain (Plastic strain) greater than 5%. Some of the examples of ductile materials are mild steel, aluminium, copper, manganese, lead, nickel, brass, bronze etc.

1.5.2 Brittleness

Brittleness is the lack of ductility i.e. materials can not be stretched. In brittle materials, fracture takes place immediately after elastic limit with a relatively smaller deformation. For the brittle materials, fracture and ultimate points are same and after proportional limit very small strain is seen. Brittle materials have post elastic strain less than 5%. Some examples of brittle materials are cast iron, concrete and glass.

**REMEMBER**

To distinguish between these two type of materials, materials with post elastic strain less than 5% at fracture point are regarded as brittle and those having post elastic strain greater than 5% at fracture point are called ductile (this value for mild steel at fracture is about 25%).

1.5.3 Malleability

Malleability is the property of metal due to which a piece of metal can be converted into a thin sheet by pressing it. A malleable material possess a high degree of plasticity. This property is of great use in operations like forging, hot rolling, drop (stamping) etc.

1.5.4 Hardness

- ♦ Hardness is resistance to scratch or abrasion.
- ♦ There are two methods of hardness measurements:
 - (a) Scratch hardness-commonly measured by Mohr's test
 - (b) Indentation hardness (abrasion) measured by
 - Brinell's hardness method
 - Rockwell hardness
 - Vickers hardness
 - Knoop hardness

1.6 CREEP

Creep is permanent deformation which is recorded with passage of time at constant loading. Total creep deformation continues to increase with time asymptotically. Consider a prismatic bar of length L on which an external static load P is applied. Due to applied static load, goes a deformation of Δ_e , but after some time it is observed that bar has gone permanent and some stress developed in bar released. This effect is called creep.

where, $\Delta_e = \text{Elastic deflection} = \frac{PL}{AE}$

$P = \text{Static load}$

$\Delta_c = \text{Deformation due to creep}$

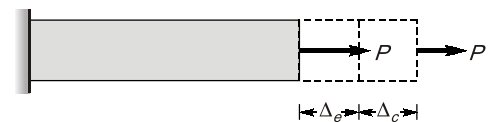


Fig. Creep in bar

Factors affecting creep are as follows:

1. Magnitude of load
2. Type of loading (static or dynamic)
3. Time or age of loading
4. Temperature
 - ♦ At higher temperature, due to greater mobility of atoms most of the materials loose their strength and elastic constants also get reduced. Hence, greater deformation at elevated temperature results, even under constant loading. Therefore, creep is more pronounced at higher temperature, and thus it must be considered for design of engines and furnaces.
 - ♦ Temperature at which the creep becomes very appreciable is half of the melting point temperature on absolute scale and is known as **homologous temperature**.



OBJECTIVE BRAIN TEASERS

Q.1 Match **List-I (Type of material)** with **List-II (Characteristics)** and select the correct answer using the codes given below the lists:

List-I

- A. Elastic material
- B. Rigid material
- C. Plastic material
- D. Resilient material

List-II

- 1. Does not store energy
- 2. Has no plastic region in stress strain curve
- 3. Behave as a spring
- 4. Offers resistance to deformation
- 5. Does not offer resistance to deformation

Codes:

	A	B	C	D
(a)	4	1	5	3
(b)	4	1	5	2
(c)	2	3	4	5
(d)	1	3	4	5

Q.2 A structure is said to be linearly elastic if

- (a) Load \propto displacement
- (b) Load $\propto \frac{1}{\text{Displacement}}$
- (c) Energy \propto displacement
- (d) Energy \propto Load

Q.3 Which one is not the characteristics of fatigue fracture?

- (a) Rough fracture surface
- (b) Rough and smooth areas on fracture surface
- (c) Plastic deformation
- (d) Conchoidal markings on fracture surface

Q.4 A fatigue crack in a sound and smooth specimen takes

- (a) longer time in initiation than propagation
- (b) longer time in propagation than initiation
- (c) equal time in initiation and propagation
- (d) no time in propagation

Q.5 Stress curve is always a straight line for

- (a) elastic material
- (b) materials obeying Hooke's law
- (c) elasto plastic materials
- (d) none of the above

Q.6 The term nominal stress in stress-strain curve for mild steel implies

- (a) average stress
- (b) actual stress
- (c) yield stress
- (d) stress at necking

Q.7 Consider the following statements:

The principle of superposition is applied to

- 1. Linear elastic bodies
- 2. Bodies subjected to small deformations

Which of these statements is/are correct?

- (a) 1 alone
- (b) 1 and 2
- (c) 2 alone
- (d) neither 1 nor 2

Q.8 The strain at a point is a

- (a) Scalar
- (b) Vector
- (c) Tensor
- (d) None of these

Q.9 If the value of Poisson's ratio is zero, then it means that

- (a) the material is rigid
- (b) the material is perfectly plastic
- (c) there is no longitudinal strain in the material
- (d) the longitudinal strain in the material is infinite

Q.10 Consider the following statements

- 1. Strength of steel increases with carbon content
- 2. Young's modulus of steel increase with carbon content
- 3. Young's modulus of steel remain unchanged with variation of carbon content

Which of these statements is/are correct?

- (a) 1 only
- (b) 2 only
- (c) 1 and 2
- (d) 1 and 3

Q.11 True stress σ is related with conventional stress σ_0 as

- (a) $\frac{\sigma}{\sigma_0} = (1 + \epsilon)^2$ (b) $\frac{\sigma}{\sigma_0} = \frac{1}{(1 + \epsilon)^2}$
(c) $\frac{\sigma}{\sigma_0} = \frac{1}{(1 + \epsilon)}$ (d) $\frac{\sigma}{\sigma_0} = 1 + \epsilon$

Q.12 Steel has its yield strength of 400 N/mm² and modulus of elasticity of 2×10^5 MPa. Assuming the material to obey Hooke's law up to yielding, what is its proof resilience?

- (a) 0.8 N/mm² (b) 0.4 N/mm²
(c) 0.6 N/mm² (d) 0.7 N/mm²

Q.13 What would be the shape of the failure surface of a standard cast iron specimen subjected to torque?

- (a) Cup and cone shape at the center.
(b) Plane surface perpendicular to the axis of the specimen.
(c) Pyramid type wedge-shaped surface perpendicular to the axis of the specimen.
(d) Helicoidal surface at 45° to the axis of the specimen.

Q.14 The greatest stress that a material can withstand for a specified length of time without excessive deformation is called

- (a) Fatigue strength
(b) Endurance limit
(c) Creep rupture strength
(d) Creep strength

Q.15 Consider the following statements:

1. Creep is usually more important at higher temperatures and higher stress.
2. Creep depends on temperature level, stress level, time and type of loading (static or dynamic).
3. The nature of creep is elastic because as soon as we remove the load, the material regains its original length.
4. Creep in concrete may relieve same tensile stress.

Which of these statements are correct?

- (a) 1, 2 and 3 (b) 1, 3 and 4
(c) 1, 2 and 4 (d) 2 and 4 only

Q.16 The following observations refer to two metal samples *A* and *B* of same size subjected to uni-axial tension test upto failure

1. Elastic strain energy of *A* is more than that of *B*.
2. Area under stress-strain curve of *A* is less than that of *B*.
3. The yield strength of *A* is more than that of *B*.
4. The percentage elongation of *A* and *B* at elastic limit are equal.

Which of the following statement is true in this regard?

- (a) Specimen *A* is more ductile than specimen *B*
(b) Specimen *B* is more ductile than specimen *A*
(c) The ductility of the two specimen is equal
(d) The data is insufficient to compare the ductilities of the two specimens

Q.17 Consider the following statements:

1. If only shear stress is acting then volume of the specimen does not change.
2. The ultimate shear strength observed from shear stress-strain curve is almost the same as ultimate normal strength observed from normal stress-strain curve.
3. For an isotropic material, number of independent and distinct elastic constants are 21.

Which of the statement are CORRECT?

- (a) 1 and 2 (b) 2 and 3
(c) 1 and 3 (d) 1 only

Q.18 What is the number of independent stress components in a body loaded under a general state of stress and a plane stress condition respectively in order to completely specify the state of stress at a point?

- (a) 9 and 4 (b) 6 and 4
(c) 9 and 3 (d) 6 and 3

Directions: The following items consists of two statements; one labelled as '**Assertion (A)**' and the other as '**Reason (R)**'. You are to examine these two statements carefully and select the answers to these items using the codes given below:

- (a) both A and R are true and R is the correct explanation of A
- (b) both A and R are true but R is not a correct explanation of A
- (c) A is true but R is false
- (d) A is false but R is true

Q.19 Assertion (A): Many materials do not have well defined yield point.

Reason (R): 0.2% offset parallel to the initial tangent of the stress-strain curve intersects the curve at yield stress.

Q.20 Assertion (A): Strain is a fundamental behaviour of the material, while the stress is a derived concept.

Reason (R): Strain does not have a unit while the stress has a unit.

Q.21 Assertion (A): The amount of elastic deformation at a certain point, which an elastic body undergoes, under given stress is the same irrespective of the stresses being tensile or compressive.

Reason (R): The modulus of elasticity and Poisson's ratio are assumed to be the same in tension as well as compression.

Q.22 Assertion (A): A mild steel tension specimen has a cup and cone fracture at failure.

Reason (R): Mild steel is weak in shear and failure of the specimen in shear takes place at 45° to the direction of the applied tensile force.

Q.23 Assertion (A): In a tensile test on a specimen, true stress in the specimen is more than nominal stress.

Reason (R): Grip of universal testing machine introduces stress concentrations.

Q.24 Assertion (A): The failure surface of a mild steel specimen subject to a torque about its axis is along a surface perpendicular to its axis.

Reason (R): Mild steel is relatively weaker in

shear than in tension and the plane of maximum shear is perpendicular to its axis.

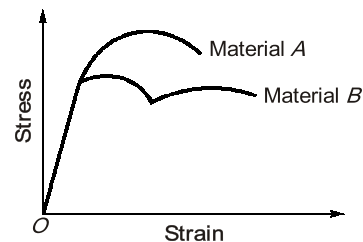
Q.25 Assertion (A): In a tension test on a cast iron specimen, the failure of the specimen is on a cross-section perpendicular to the axis of the specimen.

Reason (R): The failure of the specimen is on a plane subjected to maximum tensile-stress and cast iron is relatively weak in tension.

Q.26 Assertion (A): In a tension test on a mild steel specimen, the failure of the specimen is along a plane at 45° to cross-section.

Reason (R): The failure of the specimen is on a plane subjected to maximum shear stress and mild steel is relatively weak in shear.

Q.27 The stress strain diagram for two materials A and B is shown below:



Assertion (A): Material A is more brittle than material B.

Reason (R): The ultimate strength of material B is more than that of A.

Q.28 Assertion (A): In strain hardening region, the material appears to loose some of its strength and hence offers more resistance, thus requiring increased tensile load for further deformation.

Reason (R): The material undergoes changes in its atomic and crystalline structure in this region.

Q.29 Assertion (A): There are two independent elastic constants for an isotropic material.

Reason (R): All metals at micro-level are isotropic.

ANSWERS KEY

1. (a) 2. (a) 3. (a) 4. (a) 5. (b)
6. (a) 7. (b) 8. (c) 9. (c) 10. (d)
11. (d) 12. (b) 13. (d) 14. (d) 15. (c)
16. (b) 17. (d) 18. (d) 19. (b) 20. (b)
21. (a) 22. (a) 23. (b) 24. (a) 25. (a)
26. (a) 27. (c) 28. (d) 29. (c)

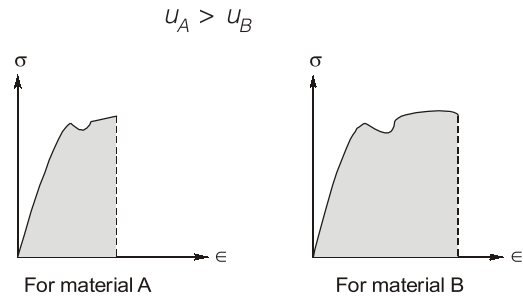
HINTS & EXPLANATIONS

5. (b)
Stress \propto strain (Hooke's law)
Which is valid within proportional limit.
Within elastic limit stress – strain curve may be linear or nonlinear. For e.g. Rubber.
6. (a)
Nominal stress = $\frac{\text{Load}}{\text{Original area}} = \frac{P}{A_0}$
Nominal stress is also called engineering stress or average stress.
Actual stress = $\frac{\text{Load}}{\text{Actual area}} = \frac{P}{A_a}$
Actual area at instant of loading does not remain constant and decreases with increase in elongation. Actual stress is also called true stress.
10. (d)
Strength of steel increases with carbon content but Young's modulus remains constant.
12. (b)
Proof resilience = $\frac{\sigma_y^2}{2E} = \frac{400^2}{2 \times 2 \times 10^5} = 0.4 \text{ N/mm}^2$
13. (d)
Brittle materials fails in a plane at 45° from the axis when subjected to torque because they are weak in tension compare to shear. If ductile materials are subjected to torque, then the failure surface will be in a plane at 90° from the axis of shaft.
15. (c)
At higher temperature creep become more important because after temperature half of

melting point, it becomes uncontrollable.

The nature of creep is elastic as well as plastic.

16. (b)



Strain energy per unit volume of A is less than B.

$$\frac{U_A}{V_A} < \frac{U_B}{V_B}$$

Since materials are same size, $\frac{U_A}{A \cdot L_A} = \frac{U_B}{A \cdot L_B}$

$$\therefore L_A > L_B$$

and given that $\sigma_{yA} > \sigma_{yB}$

\therefore Material B is more ductile than that of B.

17. (d)

For isotropic material number of elastic constant are 2 i.e. (E and μ). If body are stressed by shear stress as in pure shear case, then the change in volume of stressed body is zero.

20. (b)

During experiment in laboratory, strain is measured that is why it is called fundamental quantity. While stress is derived from strain.

22. (a)

Mild steel is enough strong in tension and compression but it is weak in shear. Hence, the failure of the specimen takes place due to shear.

23. (b)

For true stress, the actual area at any time used is less than original area, due to elongation in specimen, therefore, true stress is more than nominal or engineering stress.

29. (c)

The two elastic constants for isotropic materials are usually expressed as Young's modulus and the Poisson's ratio. However the other elastic constants K , G can also be used. For isotropic material, G and K are found out from E and μ . All metals at micro level are anisotropic.



CONVENTIONAL BRAIN TEASERS

- Q.1** For a brass alloy, the following engineering stresses produce the corresponding plastic engineering strains, prior to necking :

Engineering Stress (MPa)	Engineering Strain
235	0.194
250	0.296

On the basis of this information, compute the engineering stress necessary to produce an engineering strain of 0.25.

Solution :

- (i) As per given information, we first need to convert engineering stresses and strains to true stresses and strains.

True stress, $\sigma_T = \sigma(1 + \epsilon)$
 $(\sigma_T)_1 = \sigma_1(1 + \epsilon) = 235(1 + 0.194) = 280.59 \text{ MPa}$

True strain, $\epsilon_T = \ln(1 + \epsilon)$
 $(\epsilon_T)_1 = \ln(1 + \epsilon_1) = \ln(1 + 0.194) = 0.1773$

Similarly, true stress $(\sigma_T)_2 = \sigma_2(1 + \epsilon_2) = 250(1 + 0.296) = 324 \text{ MPa}$

True strain, $(\epsilon_T)_2 = \ln(1 + \epsilon_2) = \ln(1 + 0.296) = 0.259$

As we know, true stress and strain relationship given by :

$$\sigma_T = K\epsilon_T^n$$

$$\ln \sigma_T = \ln(K) + n \ln(\epsilon_T)$$

$$\ln(280.59) = \ln(K) + n \ln(0.1773) \quad \dots(i)$$

$$\ln(324) = \ln(K) + n \ln(0.259) \quad \dots(ii)$$

By solving equation (i) and (ii) respectively :

$$n = 0.379$$

$$\ln(K) = 6.2935$$

$$K = 541.0436 \text{ MPa}$$

General equation, $\sigma_T = K\epsilon_T^n$
 $\sigma_T = 541.0436 (\epsilon_T)^{0.379}$

For engineering strain, $\epsilon = 0.25$

True strain, $\epsilon_T = \ln(1 + 0.25) = 0.223$

$$\sigma_T = 541.0486(0.223)^{0.379}$$

$$\sigma_T = 306.3654 \text{ MPa}$$

$$\sigma_T = \sigma(1 + \epsilon)$$

$$306.3654 = \sigma(1 + 0.25)$$

Required engineering stress,

$$\sigma = \frac{306.3654}{1.25}$$

$$\sigma = 245.092 \text{ MPa}$$

- Q.2** Prove that for maximum strain hardening, true strain is equal to work hardening coefficient. For a material true stress-strain curve follows the relationship $s_T = s_0 + k\hat{\epsilon}_T^n$. If true stress, $s_T = 360 \text{ MPa}$, flow stress at zero plastic strain, $s_0 = 250 \text{ MPa}$, strain hardening exponent, $n = 0.28$ and true plastic strain $\hat{\epsilon}_T = 0.07$.

Determine the value of $\frac{d\sigma_T}{d\epsilon_T}$.

Solution :

$$\text{True strain} = \int_0^{\epsilon} d\epsilon = \int_{l_0}^l \frac{dl}{l}$$

$$\text{True strain, } \epsilon = [\ln l]_{l_0}^l = \ln\left(\frac{l}{l_0}\right)$$

$$\left(\frac{l}{l_0} - 1\right) + 1 = e + 1$$

$$\epsilon = \ln(1 + e) \quad (\text{where, } e \text{ is engineering strain})$$

$$\text{True stress: } \sigma_f = \frac{P}{A} \times \frac{A_0}{A_0}$$

$$\sigma_f = \sigma_0 \times \frac{A_0}{A}$$

$$A_0/l_0 = A/l = \text{Volume.}$$

$$\frac{A_0}{A} = \frac{l}{l_0}$$

$$\text{Now, } \frac{A_0}{A} = \left(\frac{l}{l_0} - 1\right) + 1$$

$$\frac{A_0}{A} = e + 1$$

$$\sigma_f = \sigma_0(1 + e)$$

$$\frac{dP}{d\epsilon} = \frac{d}{d\epsilon} \times \sigma_f A$$

$$\frac{dP}{d\epsilon} = \sigma_f \times \frac{dA}{d\epsilon} + A \times \frac{d\sigma_f}{d\epsilon} \quad \dots(1)$$

$$\frac{d}{d\epsilon} V = \frac{d}{d\epsilon} \times Al$$

$$0 = A \frac{dl}{d\epsilon} + l \frac{dA}{d\epsilon}$$

$$0 = \frac{A}{l} \frac{dl}{d\epsilon} + \frac{dA}{d\epsilon} \quad \left(\because \frac{dl}{d\epsilon} = l \right)$$

$$0 = A + \frac{dA}{d\epsilon}$$

$$\frac{dA}{d\epsilon} = -A \quad \dots(2)$$

Now by eq. (1) and (2):

$$\frac{dP}{d\epsilon} = -\sigma_f \times A + A \times \frac{d\sigma_f}{d\epsilon}$$

At U.T.S.

$$\frac{dP}{d\epsilon} = 0$$

Now,

$$\frac{d\sigma_f}{d\epsilon} = \sigma_f \quad \dots(3)$$

$$\frac{d}{d\epsilon} \sigma_f = \frac{d}{d\epsilon} k \epsilon^n$$

$$\frac{d\sigma_f}{d\epsilon} = k n \epsilon^{n-1} \times \frac{\epsilon}{\epsilon}$$

$$\frac{d\sigma_f}{d\epsilon} = \frac{n}{\epsilon} (k \epsilon^n)$$

$$\frac{d\sigma_f}{d\epsilon} = \frac{n}{\epsilon} \times \sigma_f \quad \dots(4)$$

by eq. (3) and (4)

$$n = \epsilon$$

For maximum strain hardening true strain is equal to work hardening coefficient.

$$\sigma_T = \sigma_0 + k \epsilon_T^n$$

$$k = \frac{\sigma_T - \sigma_0}{\epsilon_T^n}$$

Differentiating equation (i) with respect of ϵ_T

$$\frac{d\sigma_T}{d\epsilon_T} = \frac{d\sigma_0}{d\epsilon_T} + k \frac{d\epsilon_T^n}{d\epsilon_T}$$